







Complète :

40	...	42	43	...	45	48	...
...	51	54	...	56	57	...	59
60	61	65	69
...	71	72	76	...	78	...
80	83	87
...	91	94	...	96	99

Ecris en enlevant 2 :

- | | |
|------------|------------|
| 7 → | 33 → |
| 10 → | 41 → |
| 12 → | 57 → |
| 20 → | 19 → |
| 26 → | 59 → |

Entoure l'argent pour pouvoir acheter les objets :

 <p>61€</p>	
 <p>52€</p>	
 <p>46€</p>	

CHRONOMATH 12



1 $3 + 3 = \dots$

2 $4 + 4 = \dots$

3 $5 + 5 = \dots$

4 $\dots + 2 = 10$

5 $3 + \dots = 10$

6 $7 - 1 = \dots$

7 $9 - 1 = \dots$

8 $14 - 1 = \dots$

9 $9 - 2 = \dots$

10 $15 - 2 = \dots$

11 $19 - 2 = \dots$

12 $35 - 2 = \dots$

13 $47 - 10 = \dots$

14 $64 - 10 = \dots$

15 $73 - 10 = \dots$

16 $6 + 7 = \dots$

17 $8 + 9 = \dots$

18 $9 + 7 = \dots$

19 $18 + 9 = \dots$

20 $17 + 16 = \dots$

SCORE :

GP