











Dessine Théo et Léa en lisant bien le tableau :

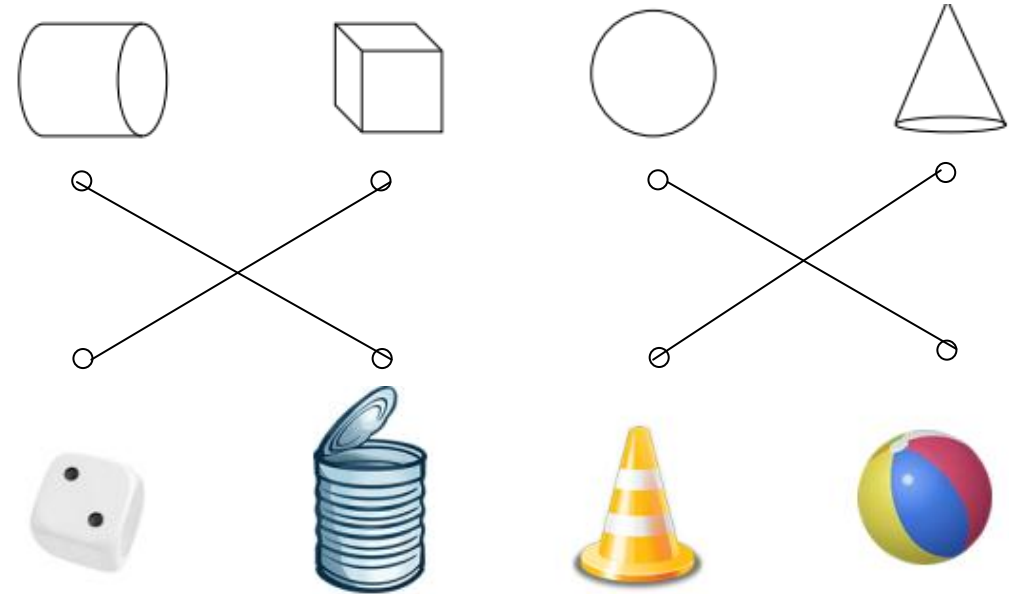
								
 Théo	X		X		X			X
 Léa	X			X		X	X	



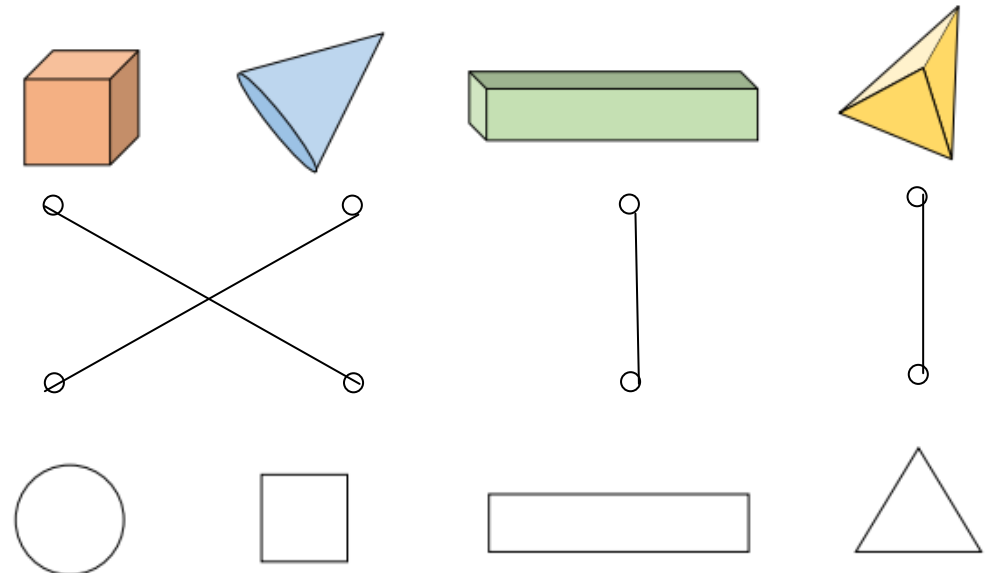
Théo

Léa

Relie les solides aux objets qui ont la même forme :



Relie les solides à leur empreinte :



Calcule :

$10 + 4 = \dots\dots\dots 14$

$15 + 3 = \dots\dots\dots 18$

$20 + 10 = \dots\dots\dots 30$

$23 + 5 = \dots\dots\dots 28$

$35 - 5 = \dots\dots\dots 30$

$35 - 4 = \dots\dots\dots 31$

$22 + 4 = \dots\dots\dots 26$

$43 + 4 = \dots\dots\dots 47$

$40 + 20 = \dots\dots\dots 60$

$43 + 20 = \dots\dots\dots 63$

$50 - 10 = \dots\dots\dots 60$

$52 - 20 = \dots\dots\dots 72$

$24 - 3 = \dots\dots\dots 21$

$22 - 3 = \dots\dots\dots 25$

$26 + 2 = \dots\dots\dots 28$

$26 + 4 = \dots\dots\dots 30$

$43 - 10 = \dots\dots\dots 33$

$49 - 8 = \dots\dots\dots 41$

$20 - 9 = \dots\dots\dots 11$

$20 - 10 = \dots\dots\dots 10$

$24 + 30 = \dots\dots\dots 53$

$45 + 30 = \dots\dots\dots 15$

$26 + 20 = \dots\dots\dots 46$

$27 + 10 = \dots\dots\dots 17$

$35 - 3 = \dots\dots\dots 32$

$35 - 4 = \dots\dots\dots 31$

$50 - 20 = \dots\dots\dots 30$

$60 - 30 = \dots\dots\dots 30$