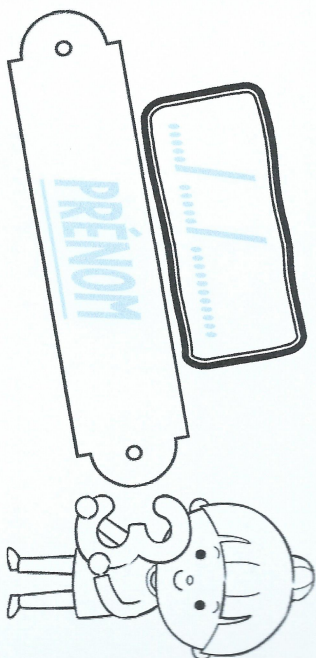
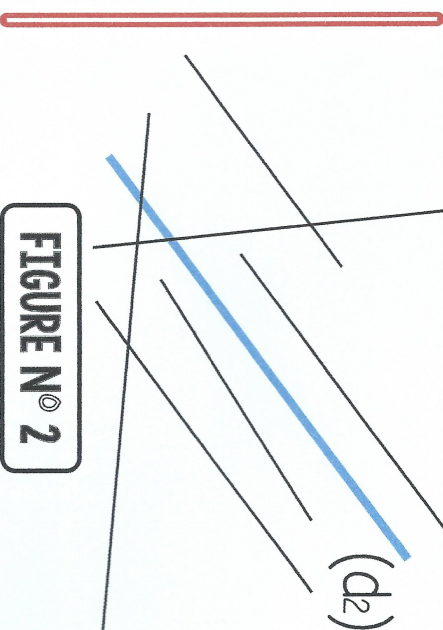
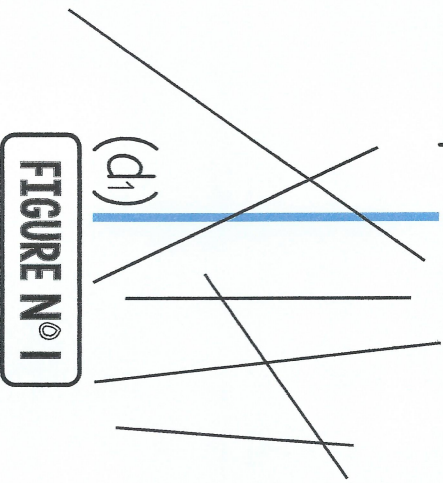



# Geométrie

CM1



① Repasse les droites parallèles avec droites (d<sub>1</sub>), (d<sub>2</sub>) et (d<sub>3</sub>).



② Trace une droite (d<sub>2</sub>) parallèle à (d<sub>1</sub>) et distante de 3 cm.

(d<sub>1</sub>)

③ Continue la frise.