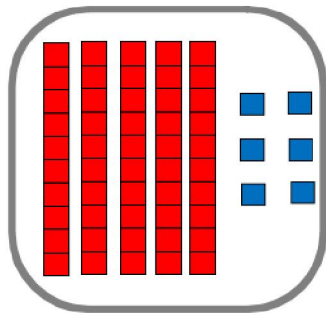


Regarde ces trois réponses :

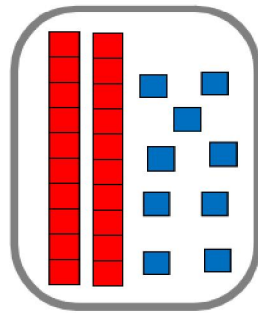
*réponse a:*

66



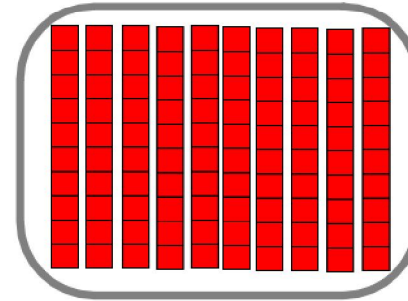
*réponse b:*

29



*réponse c:*

100



Choisis maintenant celle qui te semble être la meilleure: a, b ou c ?