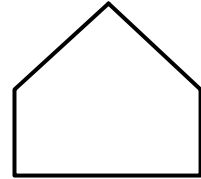

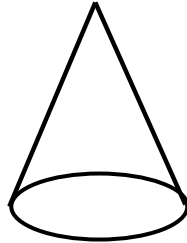

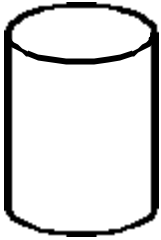
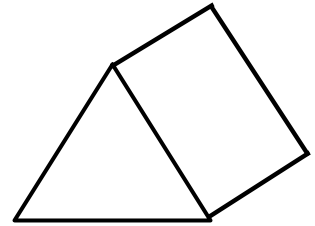
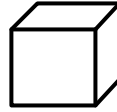


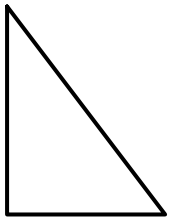
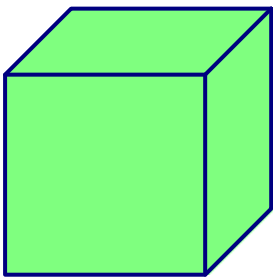


LES SOLIDES

1) Colorie les figures qui sont des solides.



2) Décris les solides suivants.



nombre de faces :

nombre d'arêtes :

nombre de sommets :

Les faces sont toutes des

Je suis un


nombre de faces :

nombre d'arêtes :

nombre de sommets :

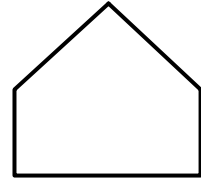
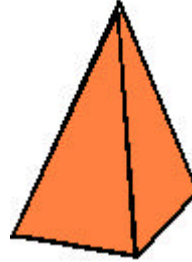

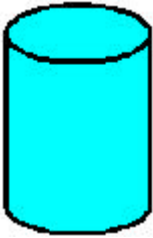
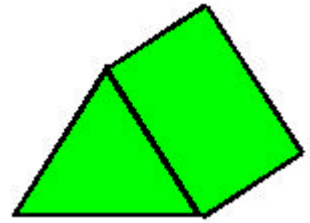
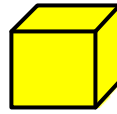

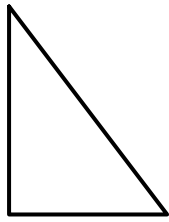
Les faces sont toutes des

Je suis un

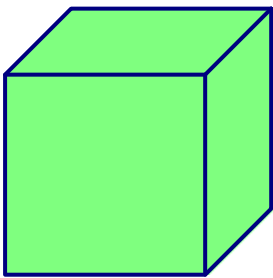


LES SOLIDES
SOLUTION

1) Colorie les figures qui sont des solides.



2) Décris les solides suivants.



nombre de faces : **6**

nombre d'arêtes : **12**

nombre de sommets : **8**

Les faces sont toutes des **carrés**.

Je suis un **CUBE**.

nombre de faces : **6**

nombre d'arêtes : **12**

nombre de sommets : **8**

Les faces sont toutes des **rectangles**.

Je suis un **PAVÉ**.

