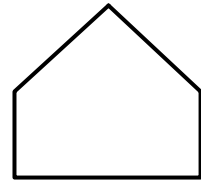

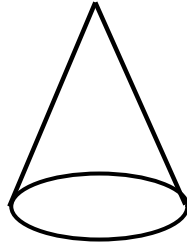

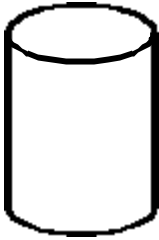
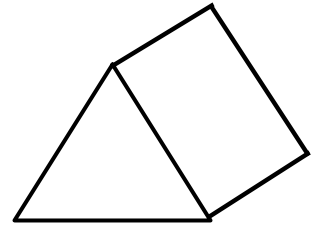
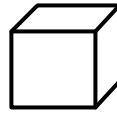

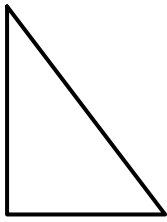
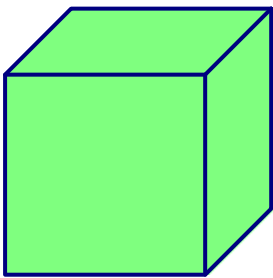


LES SOLIDES

1) Colorie les figures qui sont des solides.



2) Décris les solides suivants.



nombre de faces :

nombre d'arêtes :

nombre de sommets :

Les faces sont toutes des

Je suis un

nombre de faces :

nombre d'arêtes :

nombre de sommets :

Les faces sont toutes des

Je suis un

