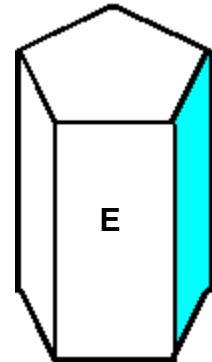
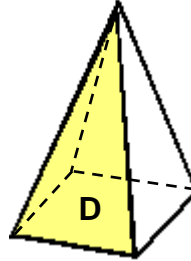
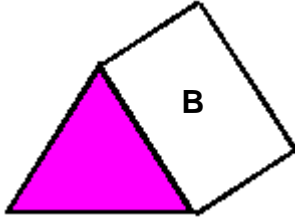
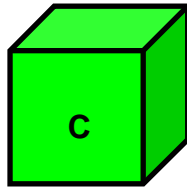
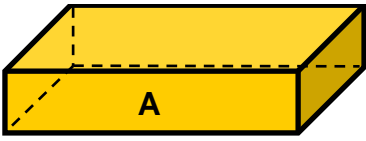


LES SOLIDES

1) Observe bien les solides puis complète le tableau.



Solides	Nombre de faces	Nombre de sommets	Nombre d'arêtes
A
B
C
D
E

2) Reproduis le solide en te servant des points.

