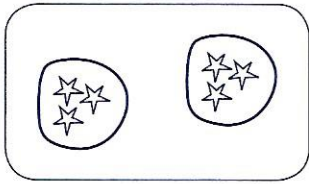
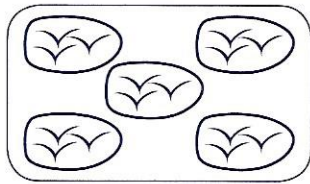


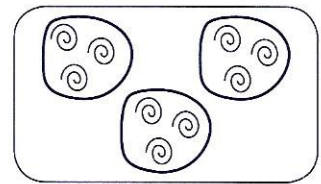
1 Écris la multiplication qui convient et calcule son résultat.



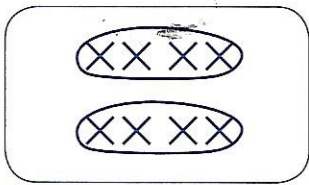
$2 \times 3 = \square$




$\square \times \square = \square$



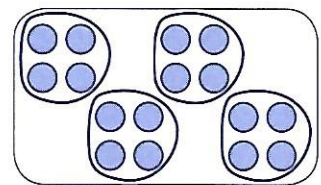
$\square \times \square = \square$



$\square \times \square = \square$

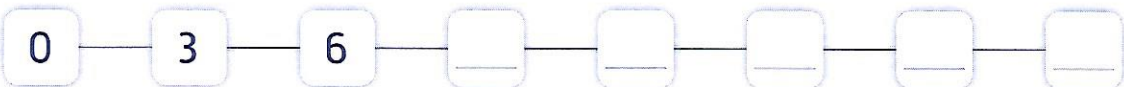


$\square \times \square = \square$

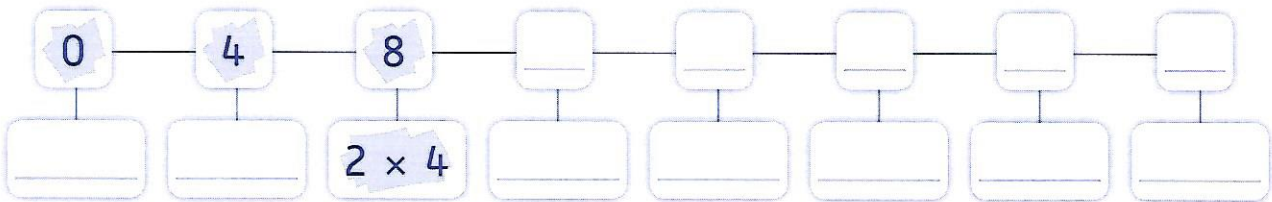


$\square \times \square = \square$

2 Complète en comptant de 3 en 3.



3 Complète en comptant de 4 en 4.



4 Complète.

$5 \times 3 = \square$ $2 \times 3 = \square$ $10 \times 3 = \square$ $1 \times 4 = \square$

5 Complète.

$9 \times 3 = 3 \times 9 = 27$ $7 \times 4 = \square \times \square = \square$
 $6 \times 4 = \square \times \square = \square$ $0 \times 3 = \square \times \square = \square$