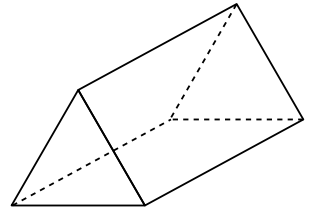
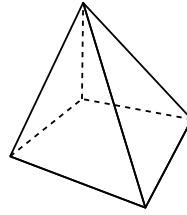
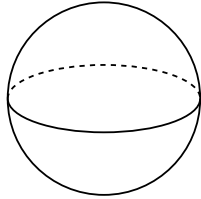
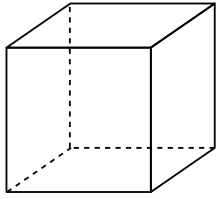
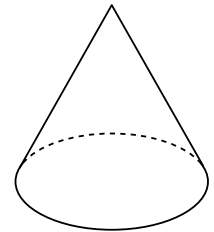
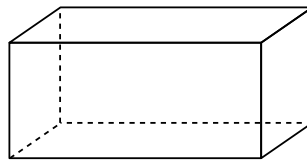
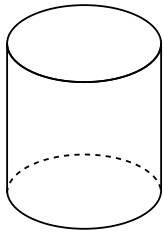


Nom : \_\_\_\_\_ Date : \_\_\_\_\_

## R 1 a. Nomme ces différents solides.



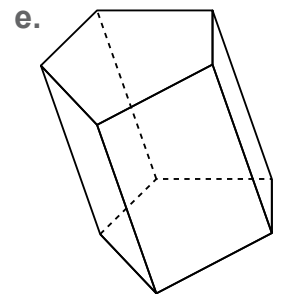
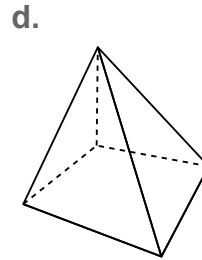
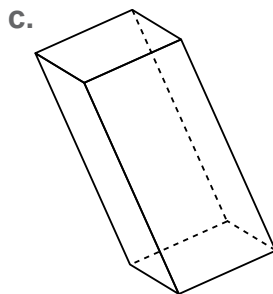
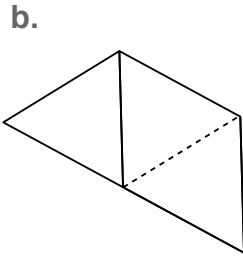
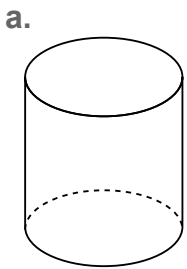
A : ..... B : ..... C : ..... D : .....



E : ..... F : ..... G : .....

## b. Colorie en bleu les polyèdres et en rouge les non-polyèdres.

## 2 Colorie les bases de ces solides.



## 3 Complète ce schéma.

