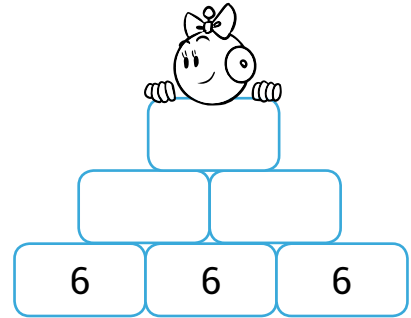
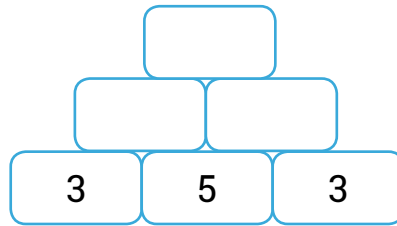
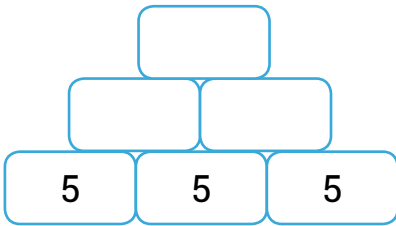




Date .....

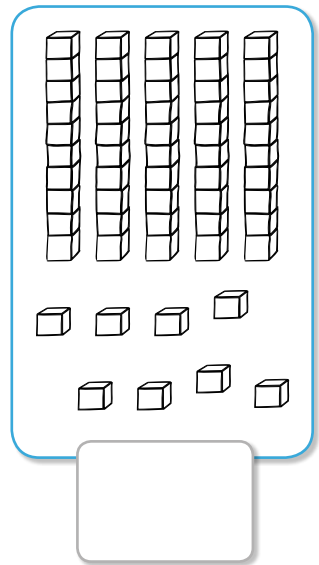
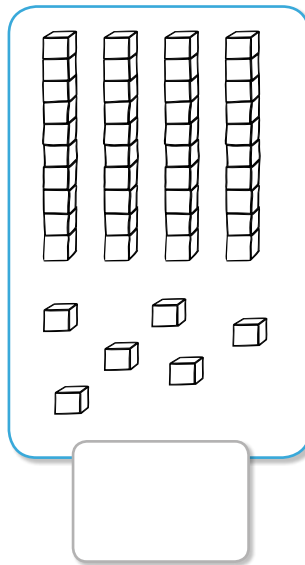
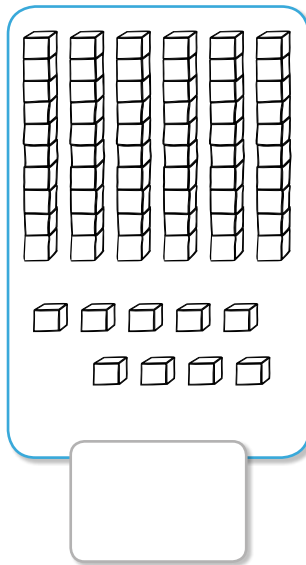
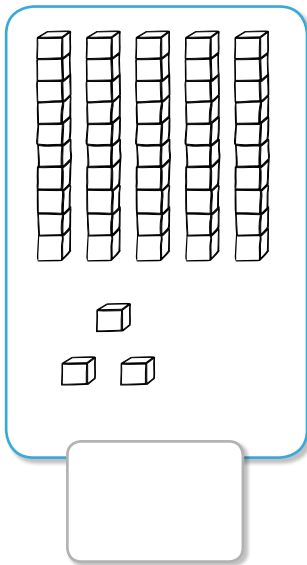
**A**

*Calcul* • Chaque case est la somme des deux cases qui se trouvent au-dessous. Complète la pyramide.



**B**

*Numération* • Écris le nombre qui correspond à chaque étiquette.




**C**

*Résolution de problème* • Tirobot donne 15 croquettes à son chat.  
Le chat mange 4 croquettes. Combien de croquettes reste-t-il dans la gamelle ?



Ta recherche :

Il reste  croquettes dans la gamelle.



Recopie : \_\_\_\_\_