



Date

A Calcul • Calcule.

$3 + 3 = \underline{\quad}$

$10 + 10 = \underline{\quad}$

$7 + 7 = \underline{\quad}$

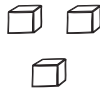

$5 + 5 = \underline{\quad}$

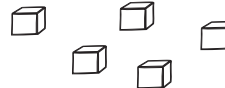
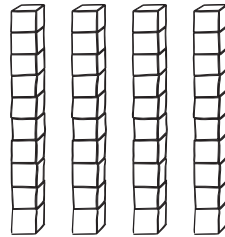
$6 + 6 = \underline{\quad}$

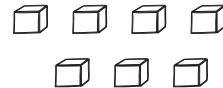

$9 + 9 = \underline{\quad}$

B Numération • Écris le nombre qui correspond à chaque étiquette.









C Résolution de problème • Tirobot a 3 voitures jaunes et 2 voitures rouges.
Combien Tirobot a-t-il de voitures en tout ?

Ta recherche :

Phrase réponse : _____

