

A partir de la sq


59

Les nombres comme Picbille jusqu'à 59




A Dessine comme Picbille.


54




47





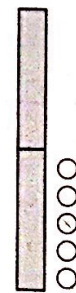
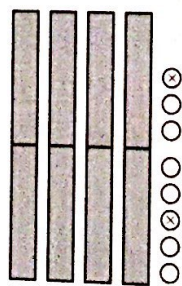
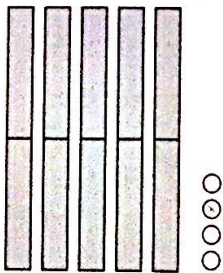
28



39



B Complète.



prénom : _____

date: _____

Objectif :

Calculer mentalement des sommes de nombres inférieurs à 10.

Règle du jeu :

Si tu calcules bien ces opérations, tu retrouveras tous les nombres inscrits dans les bulles, sauf un.
C'est le nombre mystérieux.

$3 + 6 = \underline{\quad}$

$7 + 5 = \underline{\quad}$

$8 + 3 = \underline{\quad}$

$2 + 5 = \underline{\quad}$

$9 + 4 = \underline{\quad}$

$7 + 3 = \underline{\quad}$

$6 + 8 = \underline{\quad}$

$8 + 7 = \underline{\quad}$

$7 + 9 = \underline{\quad}$

12

14

13

18

10

15


9

11

16

7


Le nombre mystérieux :



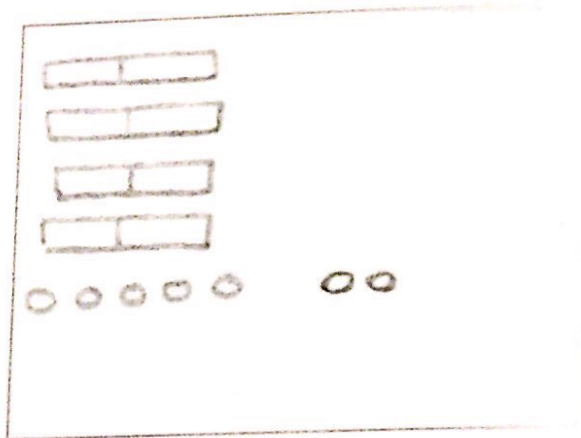
59 Les nombres comme Picbille jusqu'à 59

A Dessine comme Picbille.


54



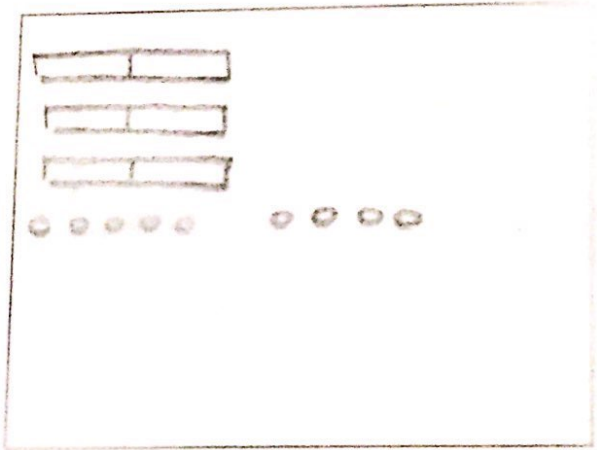
47



28




39






54




48




15



36



57



41