




Découvrir


Le jeu de l'oie



Voici les scores de plusieurs enfants.

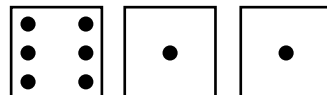
Colorie la case où ils parviennent, de la couleur demandée,
puis écris la somme de leurs points.

Anaïs : en bleu




$$\underline{\quad} + \underline{\quad} + \underline{\quad} = \underline{\quad}$$

Martin : en vert




$$\underline{\quad} + \underline{\quad} + \underline{\quad} = \underline{\quad}$$

Marie : en rouge



$$\underline{\quad} + \underline{\quad} + \underline{\quad} = \underline{\quad}$$

Léo : en jaune



$$\underline{\quad} + \underline{\quad} + \underline{\quad} = \underline{\quad}$$

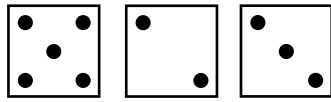


Retenir




S'entraîner

Complète.




$$5 + 2 + 3 = 7 + 3 = \underline{\quad}$$



$$\underline{\quad} + \underline{\quad} + \underline{\quad} = \underline{\quad}$$

$$\underline{\quad} + \underline{\quad} = \underline{\quad}$$

1 Complète les égalités.



$$\underline{\quad} + \underline{\quad} + \underline{\quad} = \underline{\quad}$$

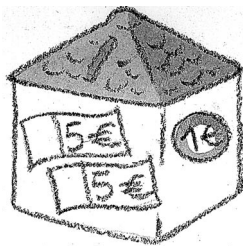


$$\underline{\quad} + \underline{\quad} + \underline{\quad} = \underline{\quad}$$



$$\underline{\quad} + \underline{\quad} + \underline{\quad} = \underline{\quad}$$

2 Complète les égalités pour savoir combien possède chaque enfant.




Clara

$$\underline{\quad} + \underline{\quad} + \underline{\quad} = \underline{\quad}$$

Éva



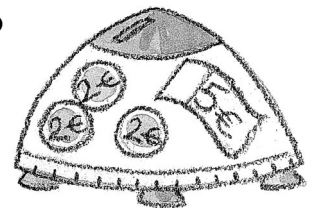
$$\underline{\quad} + \underline{\quad} + \underline{\quad} = \underline{\quad}$$



Akim

$$\underline{\quad} + \underline{\quad} + \underline{\quad} + \underline{\quad} = \underline{\quad}$$

Théo



$$\underline{\quad} + \underline{\quad} + \underline{\quad} + \underline{\quad} = \underline{\quad}$$

Calculer une somme (1)