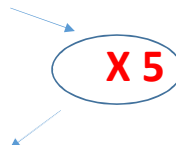


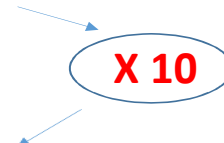
Pour tous les tableaux cherche le coefficient de proportionnalité et complète le tableau. Aide-toi de ta leçon!

6	10	19	35
30	50	95	175



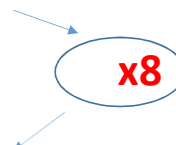
x5

4	18	52	69
40	180	520	690



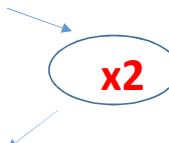
x10

4	5	10	2
32	40	80	16



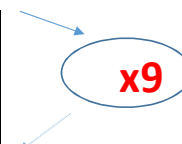
x8

1	99	44	35
2	198	88	70



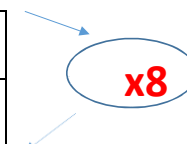
x2

90	4	60	97
810	36	540	873



x9

66	90	25	78
528	720	200	624



x8